

Name: \_\_\_\_\_

Count and represent the quantities.

●	●	●	●	●	●	●	●	●	●	●	●
●	●	●	●	●	●	●	●	●	●	●	●

□

□ □

□ + □ = □

●	●	●	●	●	●	●	●	●	●	●	●
●	●	●	●	●	●	●	●	●	●	●	●

□

□ □

□ + □ = □

●	●	●	●	●	●	●	●	●	●	●	●
●	●	●	●	●	●	●	●	●	●	●	●

□

□ □

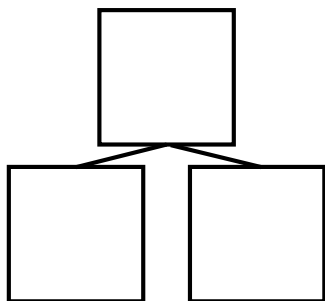
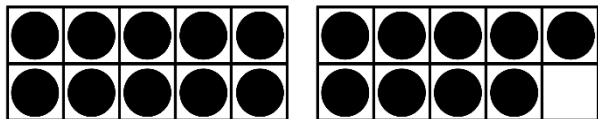
□ + □ = □

●	●	●	●	●	●	●	●	●	●	●	●
●	●	●	●	●	●	●	●	●	●	●	●

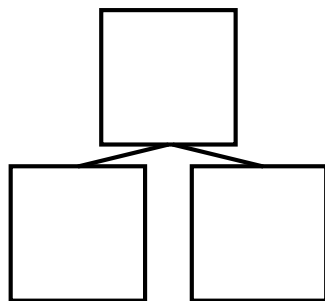
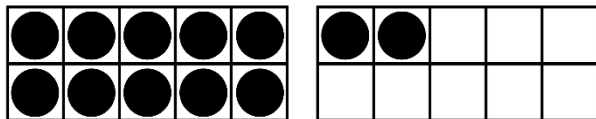
□

□ □

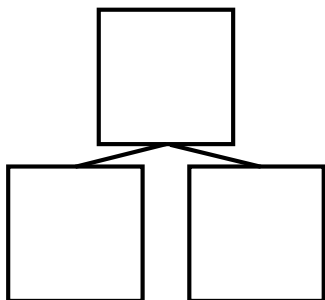
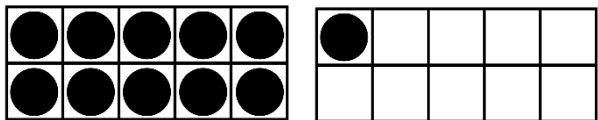
□ + □ = □



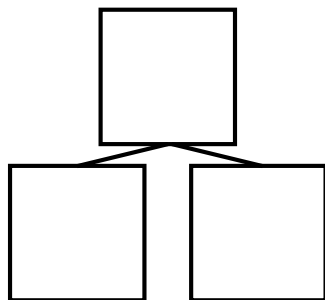
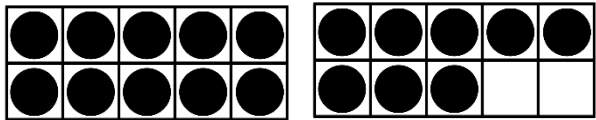
$$\square + \square = \square$$



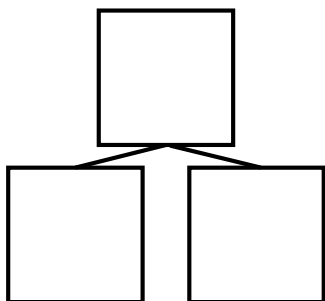
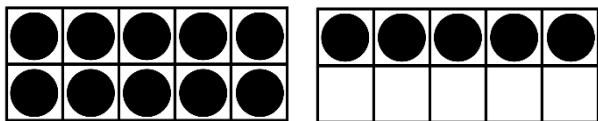
$$\square + \square = \square$$



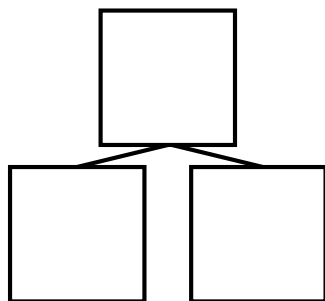
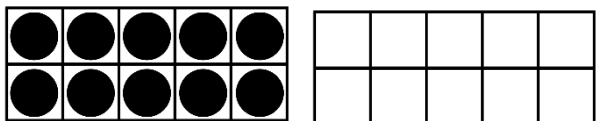
$$\square + \square = \square$$



$$\square + \square = \square$$



$$\square + \square = \square$$



$$\square + \square = \square$$